


Multiplication

Learn how to multiply by thinking of numbers as groups. Use the groups of tulips to help you answer each multiplication problem.


Example:



2 groups with 3 tulips each

There are 6 tulips in total.

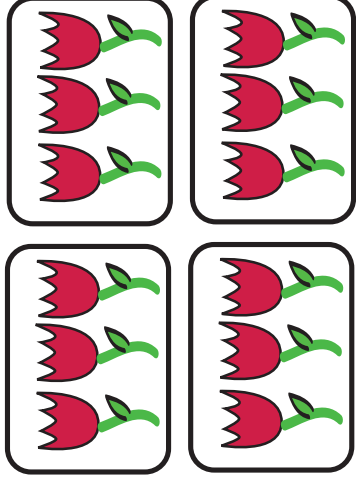
$$2 \times 3 = 6$$



___ groups with ___ tulips each

There are ___ tulips in total.

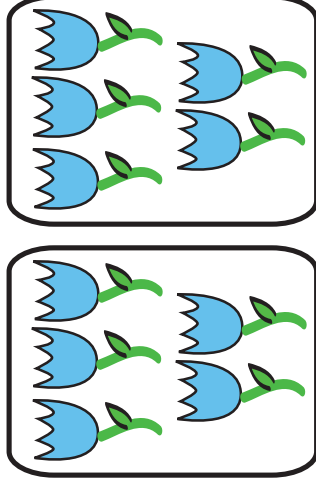
$$\underline{\quad} \times \underline{\quad} = \underline{\quad}$$



___ groups with ___ tulips each

There are ___ tulips in total.


$$\underline{\quad} \times \underline{\quad} = \underline{\quad}$$



___ groups with ___ tulips each

There are ___ tulips in total.

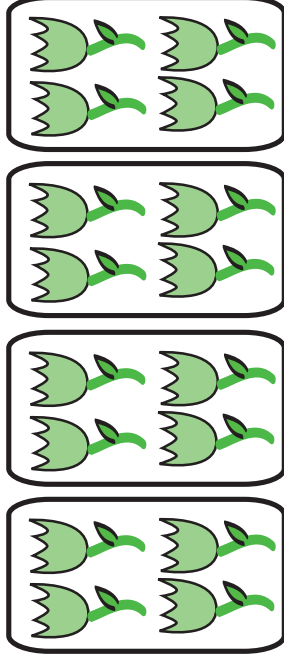
$$\underline{\quad} \times \underline{\quad} = \underline{\quad}$$



___ groups with ___ tulips each

There are ___ tulips in total.

$$\underline{\quad} \times \underline{\quad} = \underline{\quad}$$



___ groups with ___ tulips each

There are ___ tulips in total.

$$\underline{\quad} \times \underline{\quad} = \underline{\quad}$$